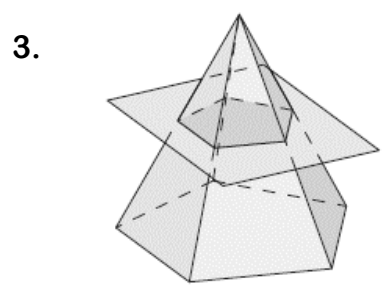
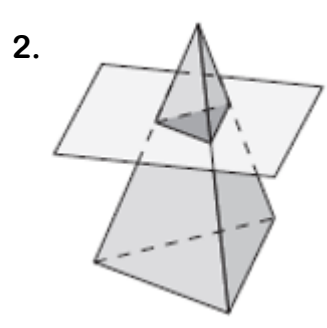
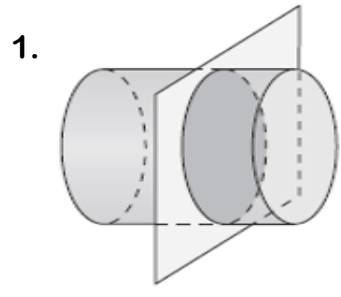


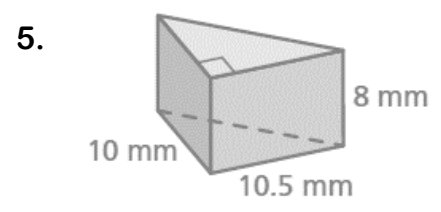
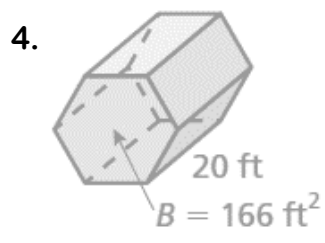
Name _____
HW #9.3

Date _____
Period _____

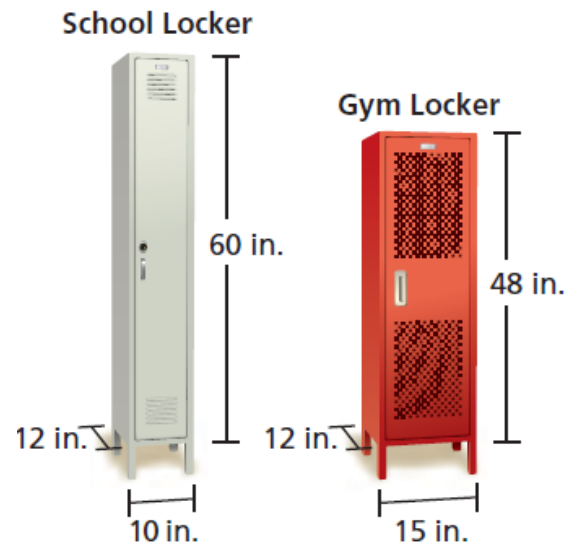
Describe the cross section of each figure below.



Find the volume of each prism.



6. Each locker is shaped like a rectangular prism. Which locker has more storage space? Show all work and explain.



7. As a gift, you fill the calendar shown with packets of chocolate candy. Each packet has a volume of 2 cubic inches.

a. Find the height of the given calendar if the volume is 96 cubic inches.



b. Find the maximum number of packets you can fit inside the calendar.